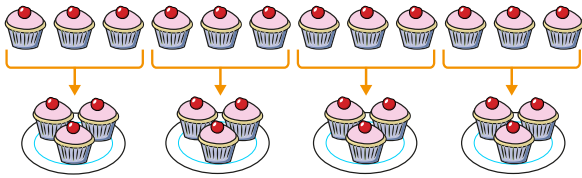


1 Here are 12 cakes.



Complete the sentences.

There are  plates.

Each plate has  cakes.

12 shared into  equal groups is

2 Circle groups of 4 flowers.



a) How many groups of 4 flowers did you make?

b) Complete the sentence.

There are  groups of 4 in 16

5 There are 20 muffins.

4 muffins fit in 1 box.

Use the number line to work out how many boxes can be filled.



boxes of muffins can be filled.


6 Alex is trying to divide 48 by 4



To multiply by 4, you can double the number and double again.


To divide a number by 4, I think you can halve the number and halve it again.

Divide the array to show that Alex's method works.



Does Alex's method always work?

3 Eva makes an array with 32 counters.




a) How many groups of 4 are in the array?

b) Use this to complete the division sentence.

$$32 \div 4 = \square$$

4 A farmer has 24 apples.

He wants to pack the apples equally into 4 bags.




How many apples will be in each bag?

$$\square \div \square = \square$$

There will be  apples in each bag.

© White Rose Maths 2019

7 Complete the bar model.



Complete the division statement to match the bar model.

$$44 \div \square = \square$$

8 Mo is working out whether numbers divide equally by both 2 and 4

Complete the table and continue the pattern.

The first one has been done for you.

Number	Divided equally by 2 is . . .	Divided equally by 4 is . . .
2	1	does not divide equally
4		
6		
8		
10		
12		

What do you notice?

\_\_\_\_\_

\_\_\_\_\_

© White Rose Maths 2019