


1 Here are some crayons.



A pack holds 10 crayons.

How many packs can be made?

Complete the sentences.

There are  crayons.

There are  crayons in a pack.

$60 \div 10 =$

packs can be made.



4 Write the missing numbers.

a)  $70 \div 10 =$

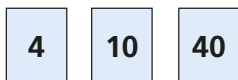
d)  tens  $\div 10 = 2$

b)  $80 \div 10 =$

e)   $\div 10 = 6$

c)  $1 \text{ ten} \div 10 =$

5 Rosie has these number cards.



Complete the number sentences using only these numbers.

$\div$    $=$

$\times$    $=$

Are there any other ways to complete the sentences?




2 Share 40 counters equally between 10 groups.



Complete the division.

$40 \div$    $=$

3 Use the array to complete the fact family.



$\times$    $=$

$\times$    $=$

$\div$    $=$

$\div$    $=$

6 Tommy has 100 stickers for his sticker book.

He can fit 10 stickers on each page.

How many pages can Tommy fill?

$\div$    $=$

Tommy can fill  pages.

7 What is the mass of one of the boxes?

