


1 Here are some counters.



a) Draw circles around groups of 5



b) Complete the sentences.

There are 30 counters.

There are  counters in each group.

There are  groups.

$$30 \div 5 = \square$$

$$\square \times 5 = 30$$

b)   $\times 5 =$

$\div 5 =$

4 Draw an array to show that  $10 \div 5 = 2$



5 A boat can fit 5 people.

Work out how many boats are needed for 45 people.

$$\square \div \square = \square$$

boats are needed.



2 Share the sweets between the party bags.



There are  sweets.

There are  party bags.

There are  sweets in each bag.

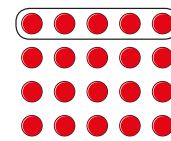
$$15 \div \square = \square$$



3 Complete the number sentences for each array.



a)



$$\square \times 5 = 20$$

$$20 \div 5 = \square$$

© White Rose Maths 2019

6 Complete the divisions.



a)  $15 \div 5 = \square$

e)  $\square \div 5 = 7$

b)  $25 \div 5 = \square$

f)  $\square \div 5 = 11$

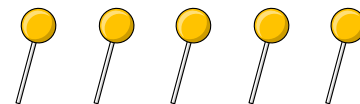
c)  $50 \div 5 = \square$

g)  $\square \div 5 = 8$

d)  $60 \div 5 = \square$

h)  $\square \div 5 = 0$

7 Annie buys 5 lollipops.



This costs her 50p.

How much do 2 lollipops cost?

p



© White Rose Maths 2019