
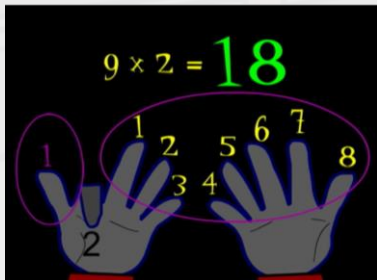


Times Table Songs



Counting by 8's



9's fact song

Friyay 5th March 2021

Maths

- PRODIGY DAY!



prodigy

- L.I. To subtract from whole numbers

Watch the input (Click the picture):



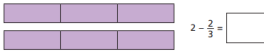
Complete the challenges using your knowledge of whole numbers and fractions we've looked at over the past 3 weeks.


(On the School website under Hawks)


White Rose Maths

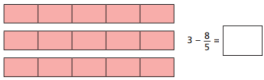
Subtract from whole amounts

1 Use the bar models to help you subtract the fractions.

a)  $2 - \frac{2}{3} = \square$

b)  $2 - \frac{1}{5} = \square$

c)  $3 - \frac{1}{5} = \square$

d)  $3 - \frac{6}{11} = \square$

2 Complete the subtractions.

a) $2 - \frac{1}{3} = \square$

b) $1 - \frac{1}{5} = \square$

c) $2 - \frac{1}{10} = \square$

d) $2 - \frac{2}{7} = \square$

e) $4 - \frac{5}{7} = \square$

f) $4 - \frac{7}{5} = \square$

3 Match the numbers with a difference of $\frac{3}{4}$.

<input type="checkbox"/> 3	<input type="checkbox"/> $2\frac{3}{4}$
<input type="checkbox"/> 1	<input type="checkbox"/> $\frac{1}{4}$
<input type="checkbox"/> 2	<input type="checkbox"/> $\frac{9}{4}$

Game time!



Tip:

If you can't find the answer, you may have to find an equivalent fraction.

Recap adding fractions with this race against time.



shutterstock.com • 316127591

Have a drink and a piece of fruit/biscuit!



We usually spend 15 mins jogging our daily mile circuit of the playground – if you have a garden can you work out how many laps that would be?

If you don't have space for laps if you can get outside for 15 mins for fresh air that would be great!

SPAG

SPELLING

science

scene

discipline

fascinate

crescent

ascent

scent

descent

scissors

LITERACY

Literacy

Edit your setting! Go back through your setting description reading aloud. Using a black pen improve any punctuation and spelling mistakes you and a partner can find. Look to improve or add adjectives and adverbs and ensure you've included all our senses.

Record yourself reading your scene setting and send them in for us to see!



Then

Reading Time!



Metch Point
Language School

After lunch – 30 mins DEAR time – read your reading book to yourself.
If an adult is there you could read aloud to them for 5 mins



Drawing Skills

Practice drawing a Chinese style dragon ready for our Art project starting the following week

[Chinese Dragon Drawing](#)



How To Draw Chinese Dragon

This has got to be our longest drawing lesson so far! Chinese dragons are so cool though we didn't even notice the time. It was such a blast drawing this with Chuckers. Also, thanks to all of our amazing art friends for sending in all of your ART! We love looking through your submissions, you are all crazy talented! _____ EMAIL A ...

www.youtube.com

